


# IDENTIFY THE HAZARD!

Did you know that every year over 100 people in the UK die a year from drowning in rivers, streams and canals.  
Look at the dangers associated with the river below. Identify as many hazards as possible...



footpath  
by river




what happens  
to river here?


what happens  
to river here?






Water  
temperature



river current



What  
do you  
notice  
about  
riverbed?

fence?



Can you see  
bottom of river?






Entrance and  
exit to river

What can a  
river carry?







SCORE

 /10


# IDENTIFY THE HAZARD!

## ANSWERS



**pollution could  
make you sick**




**uneven ground/trip  
hazards**




**rapids - very fast  
flows**




**weir - sudden drop  
in river**



**cold water -  
hypothermia**




**fast flowing water &  
undercurrents**



**uneven/sudden  
changes in depth**



**unfenced & steep  
riverbank; turbid  
water - can't see  
bottom**



**steep riverbanks**



**large objects/debris**

